

# Şekil Sayı Eşleştirme

→  
= 5

◇  
= 1

☆  
= 2

○  
= 3

▽  
= 6

⬠  
= 7

+

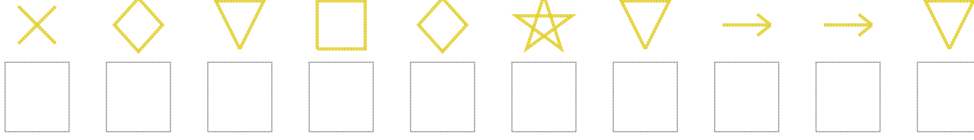
△  
= 8

×

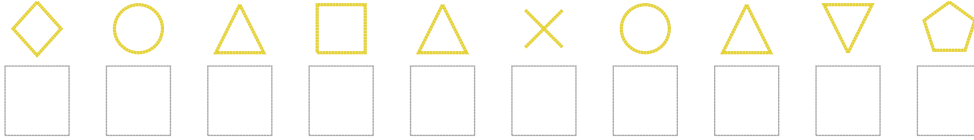
□  
= 4

Aşağıdaki uzun şifreleri hatasız çözerek altlarına yazın:

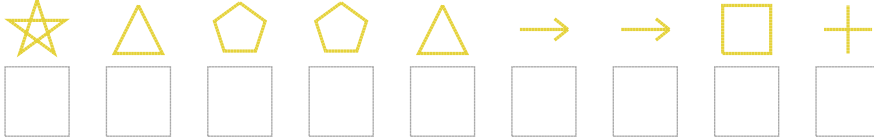
1. Şifre



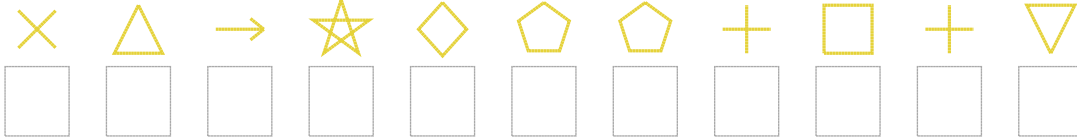
2. Şifre



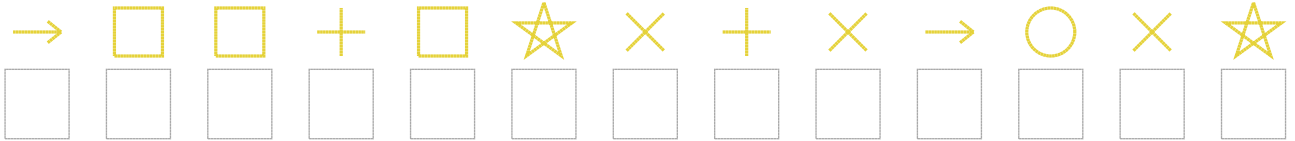
3. Şifre



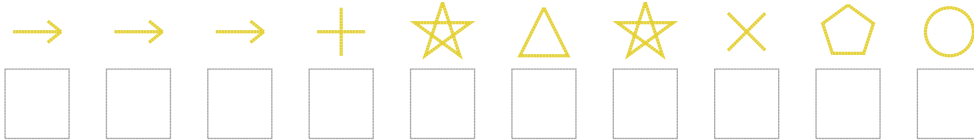
4. Şifre



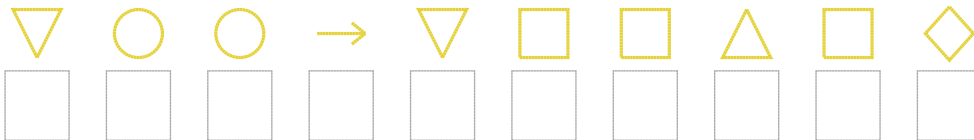
5. Şifre



6. Şifre



7. Şifre



□ BONUS: 5. ve 6. şifrenin üçüncü rakamının toplamı kaçtır? .....

## Cevap Anahtarı

1. Şifre: 9164126556

2. Şifre: 1384893867

3. Şifre: 287785540

4. Şifre: 98521770406

5. Şifre: 5440429095392

6. Şifre: 5550282973

7. Şifre: 6335644841

□ Bonus Soru Cevabı: 9